


SRI KANCHI MAHASWAMI VIDYA MANDIR  
CREATIVE CORNER  
TASK-1

CLASS: V STD  
TOPIC : FOREST

Solve the crossword puzzle

**Rain Forest Wonders**



**Across**

1. Rain forests have been called "green treasure \_\_\_\_\_."
6. Rain forests get at least 80 \_\_\_\_\_ of yearly rainfall.
7. Many rain forests are found near the \_\_\_\_\_.
9. Some rain forests get 400 inches of rainfall each \_\_\_\_\_.
10. A rain forest has \_\_\_\_\_ temperatures.
11. Half of the world's \_\_\_\_\_ of plants and animals live in rain forests.

**Down**

1. A rain forest's roof of leaves
2. Very little \_\_\_\_\_ reaches the floor of a rain forest.
3. Some rain forest trees grow 200 \_\_\_\_\_ tall.
4. The color of rain forest trees
5. The name of the largest rain forest.
8. The tops of trees

# SRI KANCHI MAHASWAMI VIDYA MANDIR

## FOREST

**CLASS:V**

**TASK : 2**

1. On the noon of 23<sup>rd</sup> June, 2012, a forest fire broke out in Pike National Forest in Colorado, USA. As the fire grew, the authorities ordered a massive evacuation of 26,000 homes, and more than 52,000 people were affected. The fire burned nearly 73 square kilometers of forest area and 346 buildings over 18 days.

Like the forest fire, industrial fires break out frequently in the cities, sometimes near residential colonies. Recently, a major fire broke out in a cracker factory because of poor quality of electrical wiring.



This fire posed a threat to the life of approximately 15,000 people living in slums around the factory. Seven fire tankers were pressed into service by the fire department, each with a capacity of 10kL 2.5 hL water, which soon got exhausted. Later, eight more water tankers of the same capacity were requested from the Jal Board and the fire was finally controlled.

Calculate the quantity of water used to control the fire if all the tankers were emptied.

\_\_\_\_\_ hL.

If the fire could have been avoided, then how many people could have used the same quantity of water to meet their daily intake?

2. Captain Salamander is crossing through a forest. He has 3 pet frogs called Dorris, Borris and Morris. He weighs them to check they are at the right weight. However, the frogs will only be weighed two at a time!

Dorris and Borris weigh 12 kg altogether.

Borris and Morris weigh 16 kg altogether.


Dorris and Morris weigh 14 kg altogether.

How much does each frog weigh?

# SRI KANCHI MAHASWAMI VIDYA MANDIR FOREST

CLASS:V

TASK : 5



## ACROSS

- 1 The animals that live in jungle and forest
- 4 Animals that are very few in numbers and may soon no longer exist
- 9 The animals that are kept in farms or homes
- 10 I am the king of jungle. I live in a den
- 12 The animal that swallow their food
- 13 The tallest animal

## DOWN

- 2 I guard your house. I live in a kennel
- 3 The biggest animal
- 5 I live in a hutch
- 6 Silk threads
- 7 A flightless bird which lived for many years and is now extinct
- 8 Candle
- 11 I chase mice away
- 12 The animals that live with us in our house

## SRI KANCHI MAHASWAMI VIDYA MANDIR

CLASS:V

TASK : 3

### தலைப்பு: காடுகள்

இலையுதிர் காடுகள் மற்றும் பசுமை மாறா காடுகள் இவற்றின் வேறுபாடுகளை உற்று நோக்கி, இவ்வகை காடுகள் இந்தியாவில் எங்கு அதிகம் உள்ளன என்பதை எழுதுக.



1972 ஆம் ஆண்டு வனவிலங்குப் பாதுகாப்புச் சட்டம் இயற்றப்பட்டது. இச்சட்டம் கூறும் முக்கிய கருத்தினை எழுதுக.





**SRI KANCHI MAHASWAMI VIDYAMANDIR  
FOREST**

**CLASS:V**

**TASK 4**

**I. दिए गए जानवरा क वन्य जोव अभयारण्य कहा हैं ?**



.....



.....



.....



.....

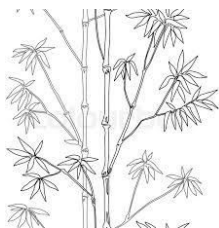


.....



.....

**II. निम्नलिखित चित्र का देखकर बताइए कि वन स हम क्या-क्या मिलत ह?**




.....




.....



.....



.....



.....